

WORKSHEET-18

CLASS 3


(SELF LEARNING)

Q1.Add:

a) 11 kg 222g and 89 kg 187 g



b) 37 km 590 m and 690 km 400 m




Q2. Sub:

a) 67 m 81cm and 31m 49 cm




b) 810 kg 349 g and 230 kg 301 g




Q3.Multiply:


a) 781 X 62




b) 37 X 18



c) 560 X 38




d) 881 X 34



Q4. Ram travelled 36 km 200m in the morning and 18 km 475m in the evening .How much distance did he travel altogether?



Q5. Seema bought $60 \ell 500 \text{ mL}$ of oil in the beginning of the month and $38 \ell 400 \text{ mL}$ was left at the end of the month. How much oil was used during the month?



Q6. Fill in the blanks:

a) Which is greater – 7 km or 7 m ? _____

b) $1 \text{ km} =$ _____ m

c) Which is smaller – 900 g or 900 kg ? _____

d) $1 \ell =$ _____ mL

Q7. What unit do we use to express these:

a) Capacity of juice in a glass. (ℓ , mL) _____

b) weight of table (g , Kg) _____

c) Length of a tablespoon . (cm , m , km) _____