

WORKSHEET-22

CLASS 3

(SELF LEARNING)

Q1. Q1.What fraction is shaded ?



a) _____



b) _____

Q2.Write the fractions:

a) Numerator = 6 , denominator = 8

b) Numerator = 7 , denominator = 11

Q3.Write in words:

a) $\frac{2}{9}$ = _____

b) $\frac{4}{11}$ = _____

Q4.Roshan has a very large collection of marbles.He keeps them in 28 small glass boxes that hold 32 marbles each.How many marbles does Roshan have?

Q5. Arrange the following in ascending order :

a) $\frac{1}{15}$ $\frac{9}{15}$ $\frac{7}{15}$ $\frac{2}{15}$

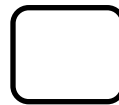


b) $\frac{13}{17}$ $\frac{5}{17}$ $\frac{3}{17}$ $\frac{4}{17}$

Q6. Arrange the following in descending order :

a) $\frac{1}{5}$ $\frac{2}{5}$ $\frac{5}{5}$ $\frac{3}{5}$

b) $\frac{3}{10}$ $\frac{5}{10}$ $\frac{9}{10}$ $\frac{4}{10}$

Q7. Write the fraction of the shaded portion and compare:



Q8. Reena bought 10m of cloth. She used 3 m in making a shirt , 1 m in making a pillow cover and the rest in making a bedsheet. What fraction of cloth was used in making a bed sheet?

