


WORKSHEET-27

CLASS 3

(SELF LEARNING)

Q1. Divide using the long division method and write the quotient and the remainder.


1. $36 \div 4$



Q = _____

R = _____

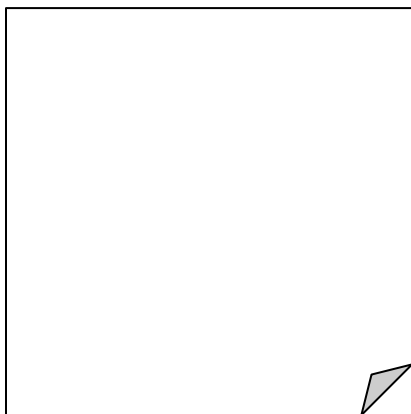
2. $8 \div 2$



Q = _____

R = _____


3. $45 \div 3$



Q = _____

R = _____

4. $21 \div 3$



Q = _____


R = _____

5. $64 \div 8$



Q = _____
R = _____

6. $42 \div 6$



Q = _____
R = _____


Q2. Divide using the long division method and write the quotient and the remainder.

1. $98 \div 4$




Q = _____
R = _____

2. $57 \div 2$




Q = _____
R = _____

3. $28 \div 7$



Q = _____
R = _____

4. $92 \div 3$




Q = _____
R = _____

5. $66 \div 8$



Q = _____
R = _____

6. $84 \div 6$



Q = _____
R = _____