

WORKSHEET-31

CLASS 3

(SELF LEARNING)

Q1: Fill in the blanks:

a) $89 + 0 = \underline{\hspace{2cm}}$

b) $\underline{\hspace{1cm}} - 10 = 0$

c) $140 + 60 = \underline{\hspace{2cm}}$

d) $562 + 12 = \underline{\hspace{1cm}} + 562$

e) $3 \times 100 = \underline{\hspace{2cm}}$

f) $343 \times 1 = \underline{\hspace{2cm}}$

g) $100 - 1 = \underline{\hspace{2cm}}$

h) $584 \times 1 \times 0 = \underline{\hspace{2cm}}$

i) $372 \div 372 = \underline{\hspace{2cm}}$

j) $6000 + 300 = \underline{\hspace{2cm}}$

k) $200 + 0 = \underline{\hspace{2cm}}$

m) $0 \div 1 = \underline{\hspace{2cm}}$

n) $29 + \underline{\hspace{1cm}} + 12 = 34 + 12 + \underline{\hspace{1cm}}$

o) $199 + \underline{\hspace{1cm}} = 200$

p) $2399 + 1 = \underline{\hspace{2cm}}$

q) $80 - \underline{\hspace{1cm}} = 30$

r) $30 \times 40 = \underline{\hspace{2cm}}$

s) $345 \div 345 = \underline{\hspace{2cm}}$

t) $602 \div 1 = \underline{\hspace{2cm}}$

u) $1200 + 100 = \underline{\hspace{2cm}}$


Q2. Divide using the long division method and write the quotient and the remainder.

1. $375 \div 4$



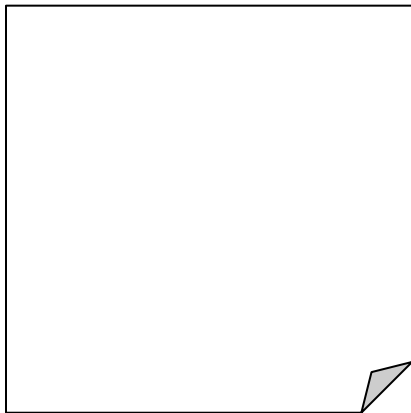
Q = _____
R = _____

2. $891 \div 2$




Q = _____
R = _____

3. $84 \div 6$




Q = _____
R = _____

4. $139 \div 3$




Q = _____
R = _____

5. $68 \div 8$



Q = _____
R = _____

6. $77 \div 6$



Q = _____
R = _____