

WORKSHEET- 33

CLASS 3

(SELF LEARNING)

Q1. Write the following in figures:-

a) Rupees 8 and 50 paise = _____

b) Rupees 187 = _____

Q2. Write the following in words:-

a) ₹ 165. 00 = _____

b) ₹923 = _____

Q3. How many 10 rupees make rupees 150?

Ans: _____

Q4. An umbrella costs ₹ 200. How many  notes will be paid for the umbrella?

Ans: _____


Q5. Raju wants to buy a packet of chips which costs ₹40 .He gave a ₹ 50 note to the shopkeeper. How much money will he get back? _____

Q6. Arrange in columns and subtract ₹ 198.00 from ₹ 500.00


Q7. Arrange in columns and add ₹345.50 and ₹1009.00




Q8. Chetan bought bananas for ₹387.00 and apples for ₹77.50. How much money did he pay altogether for the fruits?




Q9. Raju wants to buy 14 pencil boxes from a shop. Each pencil box costs ₹19. How much money does Raju need to buy the pencil boxes?



Q10. Sana had ₹2530 in her pocket. She spent ₹218. How much money is left in her pocket?




Q11. The cost of 8 pillow covers is ₹896. What is the cost of 1 pillow cover?




Q12.Multiply:

a) ₹ 720 x 52



Ans: _____

b) ₹ 588 x 6



Ans: _____

Q13.Divide:

a) ₹ 56 ÷ 2



Q = _____

R = _____

b) ₹ 567 ÷ 7



Q = _____

R = _____