


















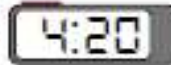


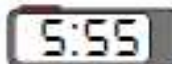


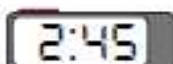



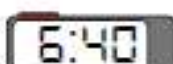

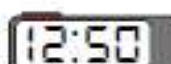


**FATHER AGNEL SCHOOL, NOIDA**  
**SELF-LEARNING MATHS WORKSHEET-28**  
**( CLASS IV )**

Match the analog clock on the top to the digital clock on the bottom.

1) 	2) 	3) 	4) 
5) 	6) 	7) 	8) 
9) 	10) 	11) 	12) 
13) 	14) 	15) 	16) 

---

















A) 	B) 	C) 	D) 
E) 	F) 	G) 	H) 
I) 	J) 	K) 	L) 
M) 	N) 	O) 	P) 

Answers




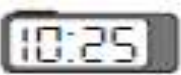
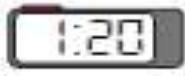

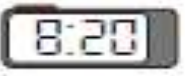




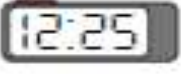




1. \_\_\_\_\_
2. \_\_\_\_\_
3. \_\_\_\_\_
4. \_\_\_\_\_
5. \_\_\_\_\_
6. \_\_\_\_\_
7. \_\_\_\_\_
8. \_\_\_\_\_
9. \_\_\_\_\_
10. \_\_\_\_\_
11. \_\_\_\_\_
12. \_\_\_\_\_
13. \_\_\_\_\_
14. \_\_\_\_\_
15. \_\_\_\_\_
16. \_\_\_\_\_

**FATHER AGNEL SCHOOL, NOIDA**  
**SELF-LEARNING MATHS WORKSHEET-29 ( CLASS IV)**

Match the analog clock on the top to the digital clock on the bottom.

1) 	2) 	3) 	4) 
5) 	6) 	7) 	8) 
9) 	10) 	11) 	12) 
13) 	14) 	15) 	16) 

---

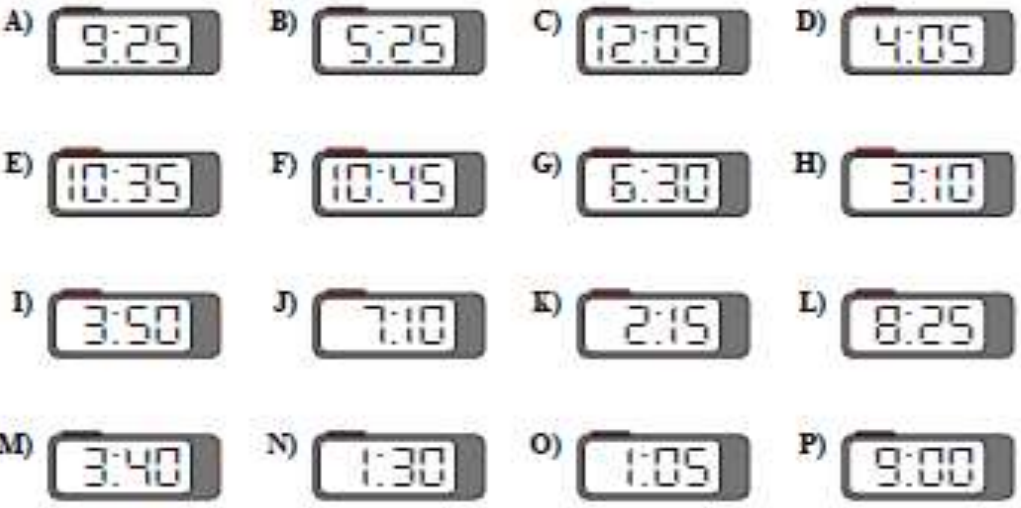
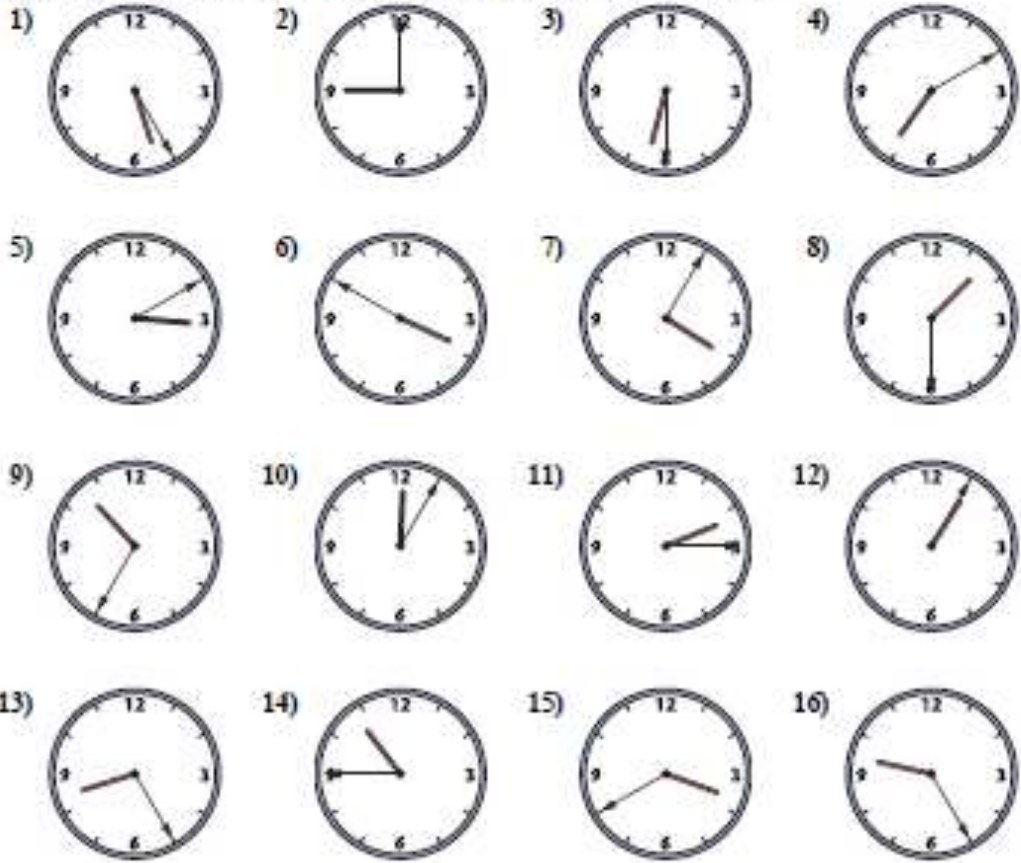
A) 	B) 	C) 	D) 
E) 	F) 	G) 	H) 
I) 	J) 	K) 	L) 
M) 	N) 	O) 	P) 

Answers

1. \_\_\_\_\_
2. \_\_\_\_\_
3. \_\_\_\_\_
4. \_\_\_\_\_
5. \_\_\_\_\_
6. \_\_\_\_\_
7. \_\_\_\_\_
8. \_\_\_\_\_
9. \_\_\_\_\_
10. \_\_\_\_\_
11. \_\_\_\_\_
12. \_\_\_\_\_
13. \_\_\_\_\_
14. \_\_\_\_\_
15. \_\_\_\_\_
16. \_\_\_\_\_

**FATHER AGNEL SCHOOL, NOIDA**  
**SELF-LEARNING MATHS WORKSHEET -30( CLASS IV)**

Match the analog clock on the top to the digital clock on the bottom.



**Answers**

1. \_\_\_\_\_
2. \_\_\_\_\_
3. \_\_\_\_\_
4. \_\_\_\_\_
5. \_\_\_\_\_
6. \_\_\_\_\_
7. \_\_\_\_\_
8. \_\_\_\_\_
9. \_\_\_\_\_
10. \_\_\_\_\_
11. \_\_\_\_\_
12. \_\_\_\_\_
13. \_\_\_\_\_
14. \_\_\_\_\_
15. \_\_\_\_\_
16. \_\_\_\_\_

FATHER AGNEL SCHOOL,NOIDA

SELF-LEARNING MATHS WORKSHEET-31 ( CLASS IV)

Draw the hour and minute hand on the clocks so they represent the time shown.

1) 12:45



2) 3:05



3) 11:40



4) 12:10



5) 11:25



6) 5:55



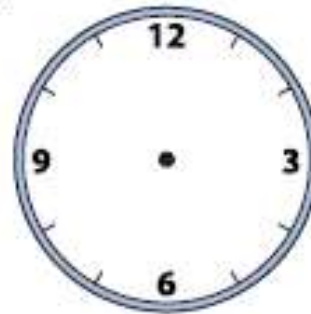
7) 3:00



8) 11:10



9) 2:05



**FATHER AGNEL SCHOOL, NOIDA**  
**SELF-LEARNING MATHS WORKSHEET -32( CLASS IV)**

Draw the hour and minute hand on the clocks so they represent the time shown.

1)

8:35



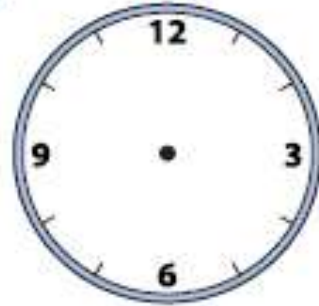
2)

1:40



3)

10:20



4)

6:25



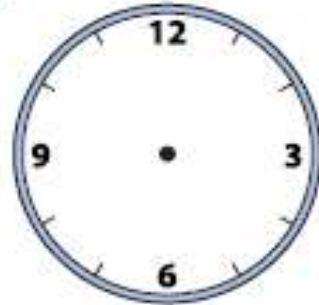
5)

9:10



6)

2:50



7)

2:00



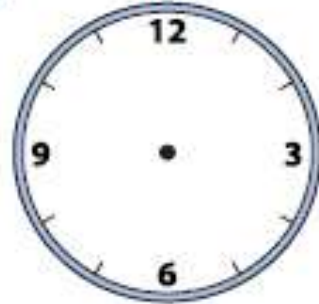
8)

9:15



9)

11:10



FATHER AGNEL SCHOOL,NOIDA

SELF-LEARNING MATHS WORKSHEET-31 ( CLASS IV)

Determine the time shown on the clock.



Answers

1. \_\_\_\_\_
2. \_\_\_\_\_
3. \_\_\_\_\_
4. \_\_\_\_\_
5. \_\_\_\_\_
6. \_\_\_\_\_
7. \_\_\_\_\_
8. \_\_\_\_\_
9. \_\_\_\_\_
10. \_\_\_\_\_
11. \_\_\_\_\_
12. \_\_\_\_\_